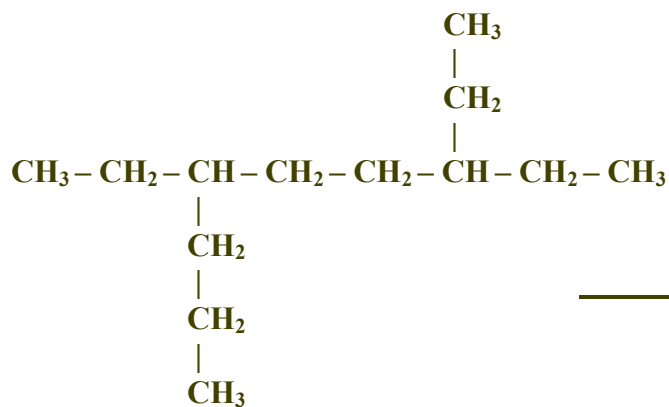




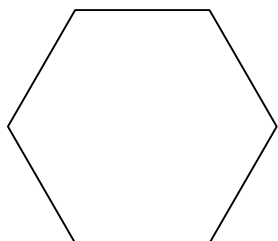
7.




---

 3,6-diethylnonane

8.

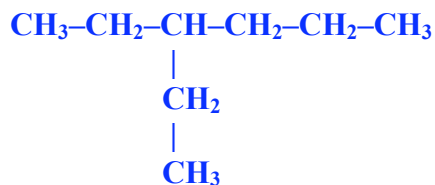



---

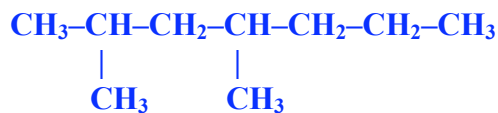
 cyclohexane

Write structural formulas for the following compounds.

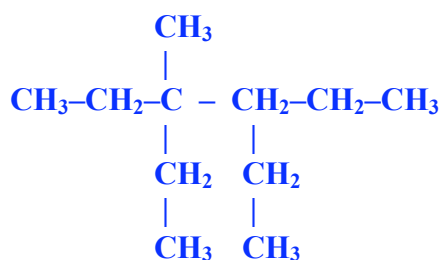
9. 3-ethylhexane



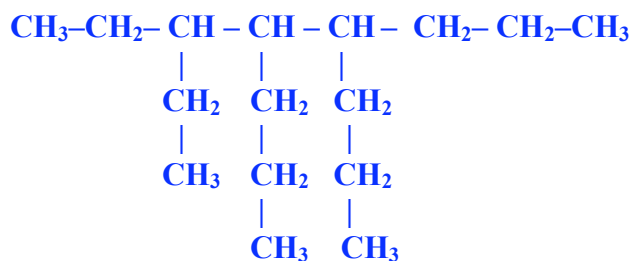
10. 2,4-dimethylheptane




11. 3,4-diethyl-3-methylhexane



12. 3-ethyl-4,5-dipropyloctane



13. cyclobutane



14. 3-ethyl-4,5-dimethyldecane

